

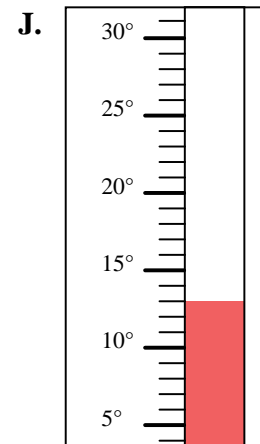
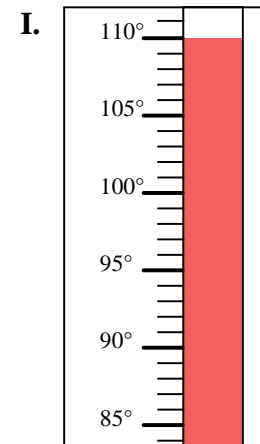
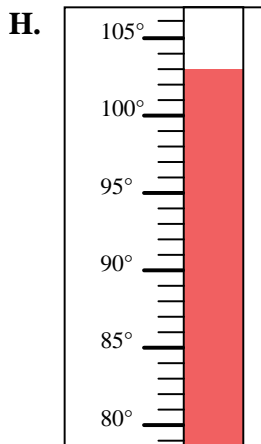
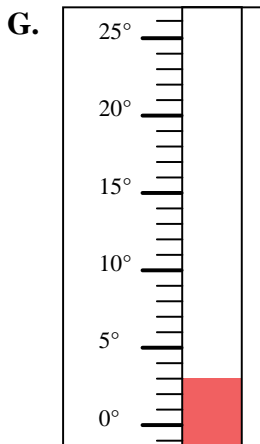
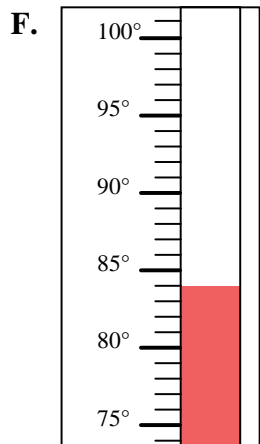
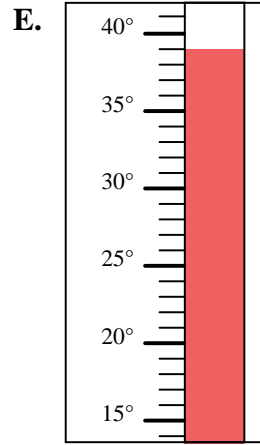
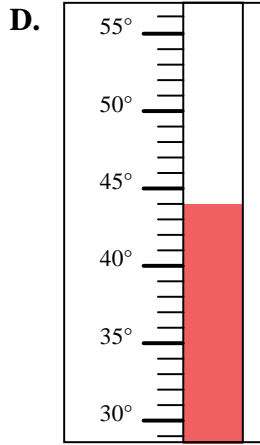
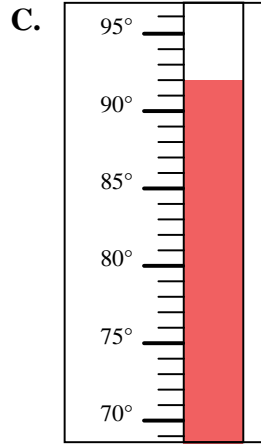
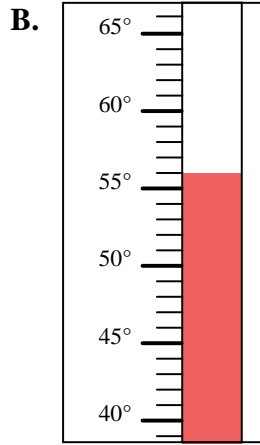
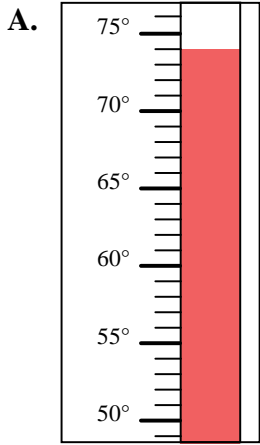


Determine which letter best answers each question.

**Answers**

- 1) Which thermometer best represents the temperature 92°?
- 2) Which thermometer best represents the temperature 84°?
- 3) Which thermometer best represents the temperature 56°?
- 4) Which thermometer best represents the temperature 110°?
- 5) Which thermometer best represents the temperature 13°?
- 6) Which thermometer best represents the temperature 39°?
- 7) Which thermometer best represents the temperature 3°?
- 8) Which thermometer best represents the temperature 44°?
- 9) Which thermometer best represents the temperature 74°?
- 10) Which thermometer best represents the temperature 103°?

1. \_\_\_\_\_
2. \_\_\_\_\_
3. \_\_\_\_\_
4. \_\_\_\_\_
5. \_\_\_\_\_
6. \_\_\_\_\_
7. \_\_\_\_\_
8. \_\_\_\_\_
9. \_\_\_\_\_
10. \_\_\_\_\_





Determine which letter best answers each question.

- 1) Which thermometer best represents the temperature  $92^\circ$ ?
- 2) Which thermometer best represents the temperature  $84^\circ$ ?
- 3) Which thermometer best represents the temperature  $56^\circ$ ?
- 4) Which thermometer best represents the temperature  $110^\circ$ ?
- 5) Which thermometer best represents the temperature  $13^\circ$ ?
- 6) Which thermometer best represents the temperature  $39^\circ$ ?
- 7) Which thermometer best represents the temperature  $3^\circ$ ?
- 8) Which thermometer best represents the temperature  $44^\circ$ ?
- 9) Which thermometer best represents the temperature  $74^\circ$ ?
- 10) Which thermometer best represents the temperature  $103^\circ$ ?

**Answers**

1.     **C**
2.     **F**
3.     **B**
4.     **I**
5.     **J**
6.     **E**
7.     **G**
8.     **D**
9.     **A**
10.     **H**

